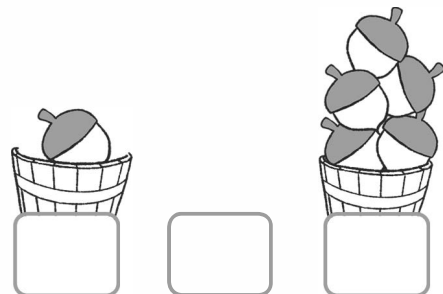
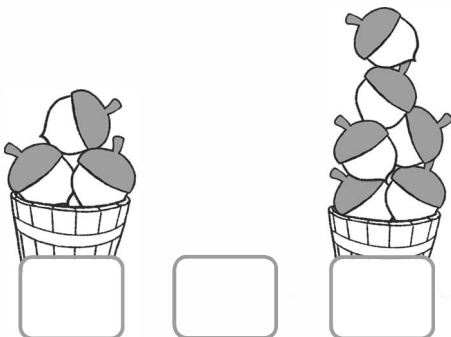

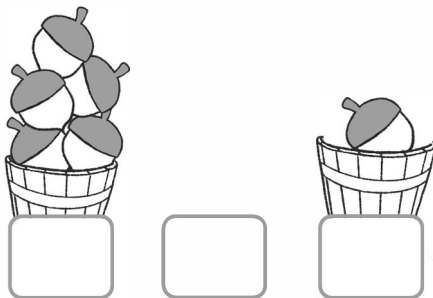
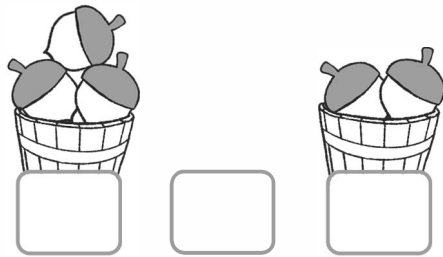
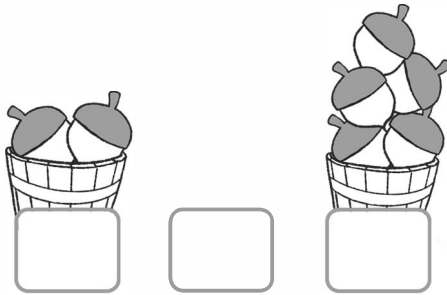
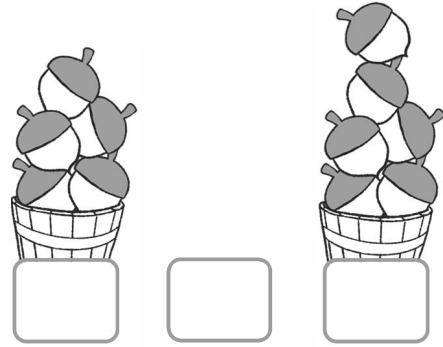



# Oh Nuts!

Mossy and Tweed are collecting acorns for winter but they can't agree who collected more! Can you help them? Count the nuts in each bucket and write the number in the box below. Then write  $<$  or  $>$  to show which bucket has more nuts.

$<$  means **less than**

$>$  means **more than**




# Nuts About Addition


Mossy and Tweed are collecting acorns for winter. Count the nuts in each bucket and write the number in the box. Add the numbers to find out how many nuts they collect.



+



=



+



=




+



=





+



=

# Mossy and Tweed solutions for math pages

 $4 + 3 = 7$ 

 $4 > 3$ 

 $5 < 6$ 

 $2 + 5 = 7$ 

 $2 < 5$ 

 $3 > 2$ 

 $5 + 1 = 6$ 

 $5 > 1$ 

 $6 > 3$ 

 $3 + 6 = 9$ 

 $3 < 6$ 

 $1 < 5$ 